

# Model Paper for B Design (Interior Design) Entrance test

## Paper - F

Time - 3 hrs

Total Marks : 200

**G.K. & Current Affairs** (20 questions) - **20 Marks**

Choose the right answer from a, b, c, d and write the selected answer (i.e., a, b, c or d) in the bracket provided.  
(Correct answers are underlined)

- 1) The President of India is \_\_\_\_\_ [     ]
  - a) Manmohan Singh
  - b) Sonia Gandhi
  - c) Pratibha Devi Singh Patil
  - d) Pranab Mukherjee
  
- 2) 'Osama Bin Laden' was shot dead in \_\_\_\_\_ [     ]
  - a) Dubai
  - b) Muscat
  - c) Pakistan
  - d) Afghanistan
  
- 3) British Prince Williams was recently married to \_\_\_\_\_ [     ]
  - a) Angelina Jolie
  - b) Julia Roberts
  - c) Jennifer Lopez
  - d) Kate Middleton
  
- 4) The capital of Ladakh is \_\_\_\_\_ [     ]
  - a) Dharamsala
  - b) Leh
  - c) Srinagar
  - d) Gangtok
  
- 5) Golden Temple in Amritsar Punjab is surrounded by \_\_\_\_\_ [     ]
  - a) Water
  - b) Green lawns
  - c) Flowering trees
  - d) Sand dunes
  
- 6) Speaker of Lok Sabha is \_\_\_\_\_ [     ]
  - a) Mrs. Sonia Gandhi
  - b) Sumitra Mahajan
  - c) Ambica Soni
  - d) Renuka Choudhary
  
- 7) Vivekananda Rock is in the \_\_\_\_\_ [     ]
  - a) North of India
  - b) West of India
  - c) South of India
  - d) East of India
  
- 8) The ruling party in Gujarat state is \_\_\_\_\_ [     ]
  - a) Congress
  - b) AIDMK
  - c) BJP
  - d) RJD

- 9) 'Sericulture' is a study of \_\_\_\_\_ [     ]
- a) Plants
  - b) Sea
  - c) Silkworms
  - d) Fish
- 10) The name of the State Emporium of Handicrafts and Handlooms of Andhra Pradesh is [     ]
- a) Mriganayani
  - b) Cauvery
  - c) Kairali
  - d) Lepakshi
- 11) The Volcano eruption in ice land caused smoke in the skies and interrupted mainly [     ]
- a) Sea traffic
  - b) Air traffic
  - c) Road traffic
  - d) People
- 12) The most famous food item during Ramzan month in Hyderabad is [     ]
- a) Biryani
  - b) Khurbani ka meetha
  - c) Haleem
  - d) Mirchi ka salan
- 13) The twin cities of Hyderabad and Secunderabad are connected by [     ]
- a) Himayathsagar lake
  - b) Hussainsagar lake
  - c) Osmansagar lake
  - d) Gandipet lake
- 14) Rabindranath Tagore won the Nobel Prize for his collection of poems called [     ]
- a) Shraddhanjali
  - b) Gitanjali
  - c) Swarnanjali
  - d) Divyanjali
- 15) The New Chief Minister of Tamil Nadu is [     ]
- a) Mamatha Banerjee
  - b) Jayalalitha
  - c) Mayawati
  - d) Edappadi K. Palaniswami
- 16) The intersecting lines on the globes and maps are [     ]
- a) Latitudes
  - b) Longitudes
  - c) Geographic grids
  - d) None of the above
- 17) Myopia is associated with [     ]
- a) Nose
  - b) Eyes
  - c) Throat
  - d) Ears

18) The system of competitive examination for civil services was accepted in principle in the year

[ ]

- a) 1833
- b) 1853
- c) 1947
- d) 1950

19) Brass gets discoloured in air because of the presence of which gas in the air ? [ ]

- a) Oxygen
- b) Hydrogen sulphide
- c) Carbon-di-oxide
- d) Nitrogen

20) A pencil point is made out of [ ]

- a) Graphite
- b) Charcoal
- c) Silicon
- d) Lead

**Multiple Choice**

Choose the right answer from a, b, c, d and write the selected answer (i.e., a, b, c or d) in the bracket provided.  
(Correct answers are underlined)

1) Which Renaissance artist painted one of the world's most famous painting, Monalisa? [       ]

- a) Raphael
- b) Michelangelo
- c) Botticelli
- d) Leonardo da Vinci

2) Ajanta and Ellora caves are located in which state [       ]

- a) West Bengal
- b) Karnataka
- c) Maharashtra
- d) Gujarat

3) Pyramids were constructed by Egyptian Kings for the purpose of

- a) As victory monuments [       ]
- b) Burying the dead royal family members
- c) Creating Art awareness for Egyptian people
- d) Performing wedding ceremonies

4) 'Cave Paintings' were done during [       ]

- a) Modern Times
- b) B.C
- c) A.D
- d) Pre Historic Times

5) 'Hampi Vijaynagar' is famous for [       ]

- a) Murals
- b) Sculptures
- c) Gardens
- d) Industries

6) Which Indian artist has recently taken the citizenship of Qatar in the Middle East [       ]

- a) Ramkumar
- b) Satish Gujral
- c) M.F.Hussain
- d) Akbar Padamsee

7) 'Posters' are used for [       ]

- a) Just like that
- b) Publicity Purpose/Information to all in General
- c) For religious purpose
- d) Marriage purpose

8) 'Raja Ravi Varma' was a well known

- a) Sculptor
- b) Theatre personality
- c) Writer
- d) Painter

- 9) Colour wheel has how many primary colours? [     ]  
a) Four colours  
b) Two colours  
c) Three colours  
d) Five colours
- 10) The colours (dyes) used in Kalamkari paintings and block prints are made from [     ]  
a) Chemical dyes  
b) Polyester  
c) Fruits  
d) Vegetable & minerals
- 11) Kondapalli toys Handicrafts industry is located in [     ]  
a) Warangal district  
b) Adilabad district  
c) Kurnool district  
d) Krishna district
- 12) Taj Mahal was built in the memory of [     ]  
a) Rukhsana Begum  
b) Noorjehan  
c) Anarkali  
d) Mumtaz
- 13) Thousand Pillar Temple is situated in [     ]  
a) Siddipet  
b) Anantapur  
c) Warangal  
d) Vishakhapatnam
- 14) 'Borra caves' are located near [     ]  
a) Visakhapatnam  
b) Tirupati  
c) Vijayawada  
d) Hyderabad
- 15) Calligraphy means [     ]  
a) Kind of dance form  
b) Beautiful handwriting  
c) To cook a special dish  
d) Pretty design
- 16) The themes of Ajanta paintings were based on [     ]  
a) Hindu religion  
b) Buddhism  
c) Christianity  
d) Sikhism
- 17) Sistine Chapel ceiling paintings were painted by [     ]  
a) Raphael  
b) Michelangelo  
c) Caravaggio  
d) David
- 18) Miniature painting in India was patronized by [     ]  
a) Kings and noble men  
b) Merchants  
c) Traders

d) Commoners

19) Folk Arts are the art forms of

[       ]

a) Urban people

b) Rural (Village) people

c) Tribals

d) Traditional people

20) 'Art' is a form of

[       ]

a) Dance

b) Theatre

c) Music

d) Self expression

# COMMUNICATION SKILLS

Total marks : 50

## PART A

(5x3 = 15)

QA1. In what ways is the use of a bicycle more advantageous than that of a motor cycle?

- a) \_\_\_\_\_
- b) \_\_\_\_\_
- c) \_\_\_\_\_

QA2. Expand the following acronyms:

- a) CPU \_\_\_\_\_
- b) CRPF \_\_\_\_\_
- c) NGO \_\_\_\_\_
- d) AFMC \_\_\_\_\_

QA3. Which of the following would you do in order to lower your carbon foot print? Give reasons in a couple of sentences.

- a. Travel by bus,      b. buy frozen foods,      c. use air conditioners,      d. eat fresh food

QA4. Compare the benefits of YOGA and GYM on your physic.

- a) \_\_\_\_\_
- b) \_\_\_\_\_
- c) \_\_\_\_\_

QA5. Which of the following expresses Mahatma's teaching for self reliance? Give reasons in a sentence.

- a. Vegetarianism,      b) non-violence,      c) fasting,      d) khadi

\_\_\_\_\_

\_\_\_\_\_

\_\_\_\_\_

---

## PART B (2x5 = 10)

QB1 Use any four words from the following and create a one sentence story :

- a) School, afraid, teacher, difficult, tomorrow, candle, pen

\_\_\_\_\_

\_\_\_\_\_

- b) Ice-cream, car, water, child, parents, hurry, dance

\_\_\_\_\_

\_\_\_\_\_





Part D (5 x 2 = 10)


Write in one sentence in a bubble what each of the characters is thinking: a)



b)



c)



d)



e)



**Illustrative, Analytical and Design Ability**

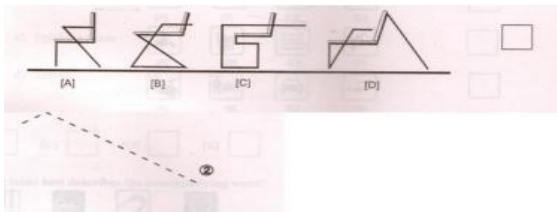
**Duration: 40 Min.**

**Total Marks: 50**

Answer all the question .Each question carries 10 marks.

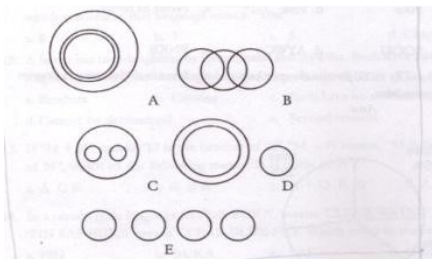
1. An 'L' shaped element is shown below. Using 4 such elements draw at least four different forms, suggesting enclosed single spaces.

2. Each of the following represents the silhouette of a rigid chair with arm rests.



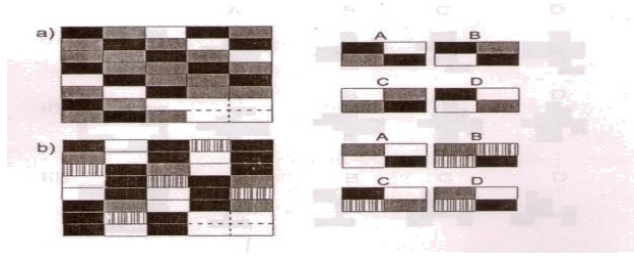
- i) Which of them is not stable at all?  
ii) Modify the chair for stability and draw in the space given.

3. Each of the questions given below contains three groups of things. You are to choose from the following numbered diagrams, the diagram that depicts the correct relationship among the three groups of things in each question.



- i) India, Bihar, UP  
ii) Carrot, Food, Vegetables  
iii) Cricket, Football, Hockey  
iv) Lake, River, Water

4. Complete the pattern from the options given below.



5. Draw and answer the following in the space provided:

- i) Any two uses of pencil of length 20 cm other than normal use.
- ii) If the pencil size is proportionately increased by 100 times .Draw any one use of it.

**Memory drawing**

**Duration: 20 Min.**

**Total Marks: 30**

- 6.** Draw proportionately in the space provided below a pen holder with two pencils and a pen. Assume light falling on the objects from above at an angle of  $45^{\circ}$  from left and accordingly show light and shade effects.  
**(Note: only free hand drawing in pencil)**

## Color Co-Ordination

Duration: 20 Min.

Total Marks: 30

7. Color the images given below by choosing suitable color schemes to indicate any two of the following.  
(Note: Use only color pencils or crayons)

- a) Arctic Zone
- b) Nature
- c) Railway platform
- d) Festivity

